

Centre Number	Candidate Number	Name
---------------	------------------	------

CAMBRIDGE INTERNATIONAL EXAMINATIONS
International General Certificate of Secondary Education

CHEMISTRY

0620/03

Paper 3

May/June 2003

1 hour 15 minutes

Candidates answer on the Question Paper.
No Additional Materials required.

READ THESE INSTRUCTIONS FIRST

Write your name, Centre number and candidate number in the spaces provided at the top of this page.
Write in dark blue or black pen in the spaces provided on the Question Paper.
You may use a pencil for any diagrams, graphs or rough working.
Do not use staples, paper clips, highlighters, glue or correction fluid.

Answer **all** questions.

The number of marks is given in brackets [] at the end of each question or part question.

A copy of the Periodic Table is provided on page 12.

If you have been given a label, look at the details. If any details are incorrect or missing, please fill in your correct details in the space given at the top of this page.

Stick your personal label here, if provided.


For Examiner's Use	
1	
2	
3	
4	
5	
TOTAL	

This document consists of **12** printed pages.



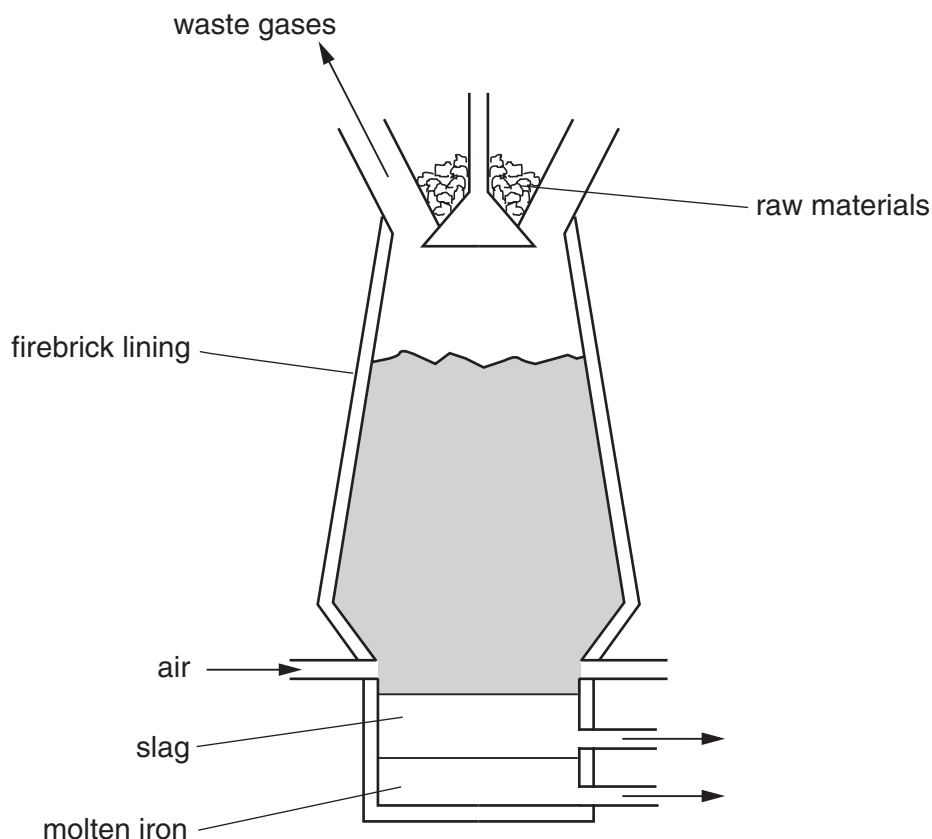
- 1 No one knows where iron was first isolated. It appeared in China, the Middle East and in Africa. It was obtained by reducing iron ore with charcoal.

(a) Complete the following equation.



[2]

- (b) In 1705 Abraham Darby showed that iron ore could be reduced using coke in a blast furnace.



- (i) The temperature in the furnace rises to 2000°C. Write an equation for the exothermic reaction that causes this high temperature.

.....

- (ii) In the furnace, the ore is reduced by carbon monoxide. Explain how this is formed.

.....

.....[3]

- (c) The formation of slag removes an impurity in the ore. Write a word equation for the formation of the slag.

.....[2]

(d) Stainless steel is an alloy of iron. It contains iron, other metals and about 0.5% of carbon.

(i) State a use of stainless steel.

.....

(ii) Name a metal, other than iron, in stainless steel.

.....

(iii) The iron from the blast furnace is impure. It contains about 5% of carbon and other impurities, such as silicon and phosphorus. Describe how the percentage of carbon is reduced and the other impurities are removed.

.....

.....

.....[6]

(e) One of the methods used to prevent iron or steel from rusting is to electroplate it with another metal, such as tin. Complete the following.

The anode is made of

The cathode is made of

The electrolyte is a solution of

[3]

- 2 Calcium and other minerals are essential for healthy teeth and bones. Tablets can be taken to provide these minerals.

Healthy Bones

Each tablet contains

calcium
magnesium
zinc
copper
boron

- (a) Boron is a non-metal with a macromolecular structure.

- (i) What is the valency of boron?

.....

- (ii) Predict **two** physical properties of boron.

.....

.....

- (iii) Name another element and a compound that have macromolecular structures.

element

compound

- (iv) Sketch the structure of one of the above macromolecular substances.

[7]

- (b) Describe the reactions, if any, of zinc and copper(II) ions with an excess of aqueous sodium hydroxide.

(i) zinc ions

addition of aqueous sodium hydroxide

.....

excess sodium hydroxide

.....

(ii) copper(II) ions

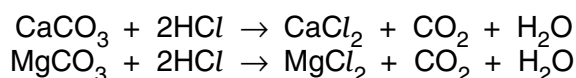
addition of aqueous sodium hydroxide

.....

excess sodium hydroxide

.....[4]

- (c) Each tablet contains the same number of moles of CaCO_3 and MgCO_3 . One tablet reacted with excess hydrochloric acid to produce 0.24 dm^3 of carbon dioxide at r.t.p.



(i) Calculate how many moles of CaCO_3 there are in one tablet.

number of moles CO_2 =

number of moles of CaCO_3 and MgCO_3 =

number of moles of CaCO_3 =

[3]

(ii) Calculate the volume of hydrochloric acid, 1.0 mol/dm^3 , needed to react with one tablet.

number of moles of CaCO_3 and MgCO_3 in one tablet =
Use your answer to (c)(i).

number of moles of HCl needed to react with one tablet =


volume of hydrochloric acid, 1.0 mol/dm^3 , needed to
react with one tablet =

[2]

3 Alkenes are unsaturated hydrocarbons. They undergo addition reactions.

(a) Two of the methods of making alkenes are cracking and the thermal decomposition of chloroalkanes.

(i) Complete an equation for the cracking of the alkane, decane.



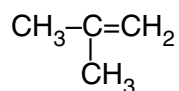
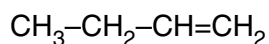
(ii) Propene can be made by the thermal decomposition of chloropropane. Describe how chloropropane can be made from propane.

reagents propane and

conditions

[4]

(b) The following alkenes are isomers.



(i) Explain why they are isomers.

.....
.....

(ii) Give the name and structural formula of another hydrocarbon that is isomeric with the above.

name

structural formula

[4]

(c) Give the name of the product when but-1-ene reacts with each of the following.

steam

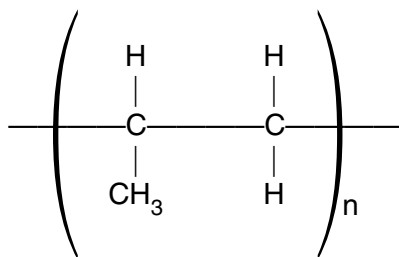
hydrogen

bromine

[3]

(d) Alkenes can polymerise.

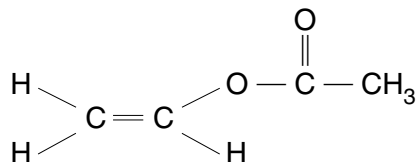
(i) Deduce the name and structural formula of the monomer from the structure of the polymer.



name of monomer

structural formula

(ii) Draw the structure of the polymer formed from the following monomer.



- (iii) Describe the pollution problems caused by the disposal of polymers in landfill sites and by burning.

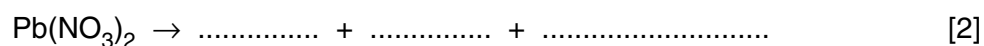
landfill sites
.....[2]

burning
.....[1]

4 Nitrogen dioxide, NO_2 , is a dark brown gas.

- (a) Most metal nitrates decompose when heated to form the metal oxide, nitrogen dioxide and oxygen.

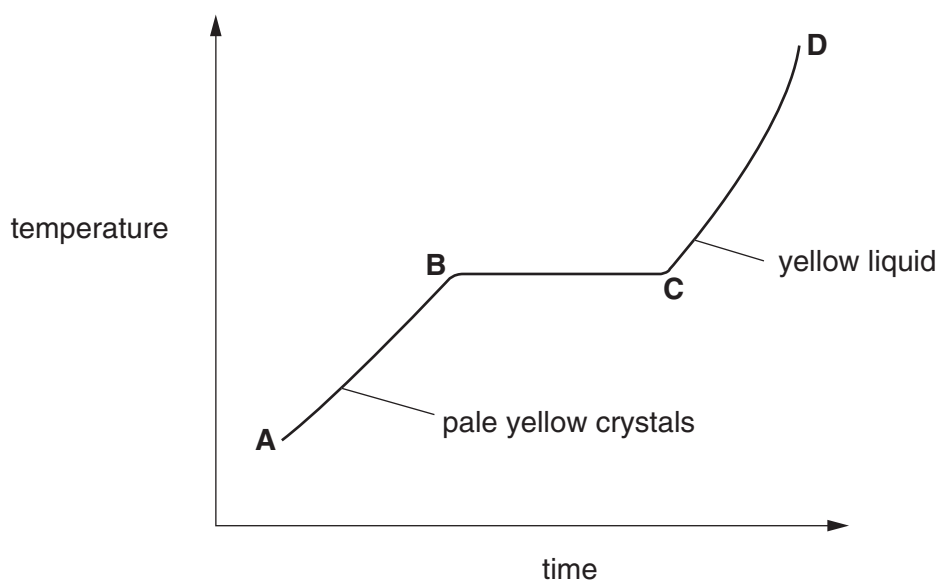
- (i) Write a symbol equation for the decomposition of lead(II) nitrate.



- (ii) Potassium nitrate does not form nitrogen dioxide on heating. Write the word equation for its decomposition.

.....[1]

- (b) When nitrogen dioxide is cooled, it forms a yellow liquid and then pale yellow crystals. These crystals are heated and the temperature is measured every minute. The following graph can be drawn.



- (i) Describe the arrangement and movement of the molecules in the region A–B.

.....
.....

(ii) Name the change that occurs in the region **B–C**

.....[4]

(c) Nitrogen dioxide and other oxides of nitrogen are formed in car engines.

(i) Explain how these oxides are formed.

.....
.....

(ii) How are they removed from the exhaust gases?

.....
.....[4]

(d) Nitrogen dioxide, oxygen and water react to form dilute nitric acid.

Describe how lead(II) nitrate crystals could be prepared from dilute nitric acid and lead(II) oxide.

.....
.....
.....[3]

- 5 The first three elements in Period 6 of the Periodic Table of the Elements are caesium, barium and lanthanum.

- (a) How many **more** protons, electrons and neutrons are there in one atom of lanthanum than in one atom of caesium. Use your copy of the Periodic Table of the Elements to help you.

number of protons

number of electrons

number of neutrons [3]

- (b) All three metals can be obtained by the electrolysis of a molten halide. The electrolysis of the aqueous halides does not produce the metal.

- (i) Complete the equation for the reduction of lanthanum ions at the negative electrode (cathode).



- (ii) Name the **three** products formed by the electrolysis of aqueous caesium bromide.

.....

.....[4]

- (c) All three metals react with cold water. Complete the word equation for these reactions.

metal + water \rightarrow + [2]

- (d) Barium chloride is an ionic compound. Draw a diagram that shows the formula of the compound, the charges on the ions and gives the arrangement of the valency electrons around the negative ion.

The electron distribution of a barium atom is 2.8.18.18.8.2

Use x to represent an electron from a barium atom.

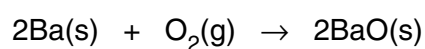
Use o to represent an electron from a chlorine atom.

[2]

- (e) Describe, by means of a simple diagram, the lattice structure of an ionic compound, such as caesium chloride.

[2]

- (f) The reactions of these metals with oxygen are exothermic.



- (i) Give an example of bond forming in this reaction.

.....

- (ii) Explain using the idea of bond breaking and forming why this reaction is exothermic.

.....

.....[3]

DATA SHEET
The Periodic Table of the Elements

Group																	
I	II							III	IV	V	VI	VII	0				
<div><div>1</div><div>H</div><div>Hydrogen</div><div>1</div></div>																	
7 Li Lithium 3	9 Be Beryllium 4							11 B Boron 5	12 C Carbon 6	14 N Nitrogen 7	16 O Oxygen 8	19 F Fluorine 9	20 Ne Neon 10				
23 Na Sodium 11	24 Mg Magnesium 12							27 Al Aluminium 13	28 Si Silicon 14	31 P Phosphorus 15	32 S Sulphur 16	35.5 Cl Chlorine 17	40 Ar Argon 18				
39 K Potassium 19	40 Ca Calcium 20	45 Sc Scandium 21	48 Ti Titanium 22	51 V Vanadium 23	52 Cr Chromium 24	55 Mn Manganese 25	56 Fe Iron 26	59 Co Cobalt 27	59 Ni Nickel 28	64 Cu Copper 29	65 Zn Zinc 30	70 Ga Gallium 31	73 Ge Germanium 32	75 As Arsenic 33	79 Se Selenium 34	80 Br Bromine 35	84 Kr Krypton 36
85 Rb Rubidium 37	88 Sr Strontium 38	89 Y Yttrium 39	91 Zr Zirconium 40	93 Nb Niobium 41	96 Mo Molybdenum 42	101 Tc Technetium 43	101 Ru Ruthenium 44	103 Rh Rhodium 45	106 Pd Palladium 46	108 Ag Silver 47	112 Cd Cadmium 48	115 In Indium 49	119 Sn Tin 50	122 Sb Antimony 51	128 Te Tellurium 52	127 I Iodine 53	131 Xe Xenon 54
133 Cs Caesium 55	137 Ba Barium 56	139 La Lanthanum 57	178 Hf Hafnium 72	181 Ta Tantalum 73	184 W Tungsten 74	186 Re Rhenium 75	190 Os Osmium 76	192 Ir Iridium 77	195 Pt Platinum 78	197 Au Gold 79	201 Hg Mercury 80	204 Tl Thallium 81	207 Pb Lead 82	209 Bi Bismuth 83	210 Po Polonium 84	210 At Astatine 85	210 Rn Radon 86
87 Fr Francium	226 Ra Radium	227 Ac Actinium															

58-71 Lanthanoid series

90-103 Actinoid series

140 Ce Cerium 58	141 Pr Praseodymium 59	144 Nd Neodymium 60	150 Sm Samarium 62	152 Eu Europium 63	157 Gd Gadolinium 64	159 Tb Terbium 65	162 Dy Dysprosium 66	165 Ho Holmium 67	167 Er Erbium 68	169 Tm Thulium 69	173 Yb Ytterbium 70	175 Lu Lutetium 71
232 Th Thorium 90	232 Pa Protactinium 91	238 U Uranium 92	238 Pu Plutonium 94	238 Am Americium 95	238 Cm Curium 96	238 Bk Berkelium 97	238 Cf Californium 98	238 Es Einsteinium 99	238 Fm Fermium 100	238 Md Mendelevium 101	238 No Nobelium 102	238 Lr Lawrencium 103

a

X

b

a = relative atomic mass

X = atomic symbol

b = proton (atomic) number

Key